












Puzzle fracción de un número

Calcula, Recorta, pega y colorea.

Nombre: Fecha:

$\frac{3}{3}$ de 18 = <input type="text"/> <input type="text"/>  $18 \begin{array}{r} 3 \\ \hline 6 \end{array} \quad \begin{array}{r} 6 \\ \times 3 \\ \hline 18 \end{array}$	$\frac{4}{4}$ de 16 = <input type="text"/> <input type="text"/> 	$\frac{5}{8}$ de 72 = <input type="text"/> <input type="text"/> 
$\frac{2}{9}$ de 18 = <input type="text"/> <input type="text"/> 	$\frac{3}{4}$ de 28 = <input type="text"/> <input type="text"/> 	$\frac{3}{3}$ de 15 = <input type="text"/> <input type="text"/> 
$\frac{3}{9}$ de 81 = <input type="text"/> <input type="text"/> 	$\frac{5}{5}$ de 25 = <input type="text"/> <input type="text"/> 	$\frac{4}{4}$ de 28 = <input type="text"/> <input type="text"/> 
$\frac{1}{1}$ de 10 = <input type="text"/> <input type="text"/> 	$\frac{3}{3}$ de 24 = <input type="text"/> <input type="text"/> 	$\frac{1}{9}$ de 63 = <input type="text"/> <input type="text"/> 